

D.A.V PUBLIC SCHOOL, SAINIK COLONY, SECTOR-49 FARIDABAD  
SUMMER BREAK ASSIGNMENT  
SESSION-2017-18

CLASS-II SUB-ENGLISH

NAME..... CLASS..... ROLL NO..... T.SIGN.....

**Q1. Read the comprehension and answer the following questions.**

In a thick jungle there lived a big lion. He was very strong. He was the King of the jungle. All the other animals were afraid of him. They would run and hide, when they heard the lion roar.

Answer the following questions given below.

Q1- Where did the lion live?

Ans-.....

Q2- Was the lion strong or weak?

Ans-.....

Q3- Which animal was the king of the jungle?

Ans-.....

Q4-What did the other animals do when the lion roared?

Ans-.....

**Q2. Rearrange the sentence-**

a) Sleeping /baby/the/is

Ans-.....

b) Yesterday/went/market/to/I/the

Ans-.....

**Q3. Read the sentence and circle the nouns.**

a) Joe is my cousin

b) I like these beautiful flowers.

c) There are no markers in the box.

d) She played with her brother.

Q4. Choose the correct preposition to complete the sentence.

- a) The eggs are ..... (in/under) the nest.
- b) Anna is ..... (in/behind) the door.
- c) Puff and his family lived.....( on/at) the boat.

Q5. Make sentences with the help of words given below-

- a) Dig- .....
- b) Mop- .....
- c) Afraid-.....

Q6. Look at the picture and answer the following questions.



a) Where are the children playing ?

Ans-.....

b) Are the children enjoying in the picture?

Ans-.....

c) How many girls are there in the picture?

Ans-.....

डी. ए. वी . पब्लिक स्कूल सैनिक कॉलोनी फरीदाबाद ( २०१७-२०१८)

कक्षा -दूसरी विषय-हिंदी ग्रीष्मावकाशकार्य

नाम ----- रोल न. ----- सेक्शन - - -

1. इन सभी मात्राओं का व्यंजन के साथ प्रयोग किया जाता है

स्वर	मात्रा	व्यंजन में मात्रा का प्रयोग
अ	.....	क कमल
आ	.....	.....
इ	.....	.....
उ	.....	.....
ऊ	.....	.....
ए	.....	.....
ऐ	.....	.....
औ	.....	.....
औ	.....	.....

2. शब्दों से मात्रा अलग करो

१ बगीचे	.....	.....	.....
२ तैरती	.....	.....	.....
३ धोबी	.....	.....	.....
४ नौकरानी	.....	.....	.....

3. सही वाक्य बनाओ

- १ सब ताली लोग लगे बजाने -----
- २ पढ़ता दूसरी कक्षा समीर है में -----
- ३ सामने घर बनिया के है एक घर के -----
- ४ खाती है चारा गाय व घास -----

4. अक्षरों को ठीक से मिलाकर सही शब्द लिखो

१. एक पशु का नाम \_\_\_\_\_ (रहिन.)

२. एक फूल का नाम \_\_\_\_\_ (लमक )

३ एक शहर का नाम \_\_\_\_\_ (राआग )

४ एक पेड़ का नाम \_\_\_\_\_ (दरगाब)

५ एक फल का नाम \_\_\_\_\_ (तज्बूर)

5. अंको में दी गयी संख्याँ को शब्दों में लिखो


5    ५    \_\_\_\_\_

2    २    \_\_\_\_\_

8    ८    \_\_\_\_\_

10    १०    \_\_\_\_\_

6. दिए गए शब्दों की सहायता से वाक्य पूरे करो



(कुत्ता , बच्चे , माली , फूल , पौधों)

१. बगीचे में एक ..... है ।

२. वह ..... को पानी दे रहा है ।

३. वहाँ रंग बिरंगे .....खिले हैं।

४. बगीचे में एक ..... भाँक रहा है ।

५. उसके पीछे दो ..... दौड़ रहे हैं ।

नोट :---- प्रतिदिन एक सुलेख करें । प्रतिदिन चार नए शब्द लिख कर मात्रा पहचानो का अभ्यास करे ।

CLASS II SUB - MATHS

SUMMER BREAK ASSIGNMENT

Q-1 Match the ordinal numbers :

- |    |   |  |         |
|----|---|--|---------|
|    | A |  | B       |
| a) | 5 |  | seventh |
| b) | 7 |  | fifth   |

Q-2 Write in expanded form with place value:

- a) 443 =  hundreds +  tens +  ones
- b) 443 =  hundreds +  tens +  ones

Q-3 Do as directed:

	Expanded form	numeral	number name
a)	2 hundreds 6 tens 5 ones	<input type="text"/>	<input type="text"/>
b)	7 tens 6 ones	<input type="text"/>	<input type="text"/>

Q-4 Fill in the blanks:

- a) 346 =  +  +
- b) 842 =  +  +

Q-5 Complete the pattern:

- a)  \_\_\_\_\_
- b) 2            4            6            8            10            \_\_\_\_\_

Q-6 Do as directed :

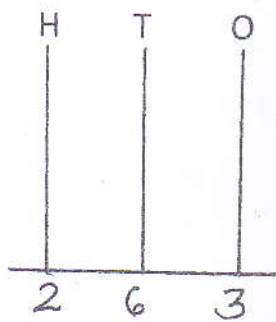
a) Circle the first square from the left



b) Circle the third triangle from the right



Q-7 Draw the beads in the abacus :




\_\_\_\_\_ Hundreds + \_\_\_\_\_ tens + \_\_\_\_\_ ones

Q-8

BE A DETECTIVE

Find the tree which is bearing the secret number using the clues below. Put the cross on each tree that you think is not bearing the secret number.



CLUES:

- The tree with the secret number is not at the beginning of any row.
- The tree with the secret number is not at the end of any row.
- The secret number is not a one digit number.
- The secret number is more than 20 but less than 30.
- The secret number is half of the sum of 20 and 30.

THE SECRET NUMBER IS \_\_\_\_\_

X-----X-----X

D.A.V PUBLIC SCHOOL ,SAINIK COLONY ,SEC-49 FARIDABAD  
SUMMER BREAK ASSIGNMENT  
CLASS-II SESSION 2017-18  
SUB- E.V.S

Name..... Class..... Roll no..... T.sign.....

**Q1. Tick( ) the correct option-**

1- We get milk from

- a) fish      b) cow      c) tiger


2- The body part which rhyme with south

- a) chest      b) mouth      c) neck

3- Person who eats meat of animals are known as

- a) Vegetarian      b) Non -vegetarian

**Q2. Write the following body parts-**




**Q3. State good or bad-**

1- Biting nails is a good habit. ....

2- Food gives us energy. ....


3- Flies make the food healthy. ....

Q4. Circle all the food that promote good health habits with green colour.



Q5. Match the following-


1- help us to see



2- Milk



3- Meat



Q6. Write and learn the following information-

a) My address-.....

b) My contact no.-.....